

Maker–Breaker total domination game on cubic graphs

Jovana Forcan^{*†} and Mirjana Mikalački[‡]

Abstract

We study Maker–Breaker total domination game played by two players, Dominator and Staller on the connected cubic graphs. Staller (playing the role of Maker) wins if she manages to claim an open neighbourhood of a vertex. Dominator wins otherwise (i.e. if he can claim a total dominating set of a graph). For certain graphs on $n \geq 6$ vertices, we give the characterization on those which are Dominator’s win and those which are Staller’s win.

Keywords: Positional games, Maker–Breaker game, Total domination game, Cubic graphs, Generalized Petersen graph.

1 Introduction

In a Maker–Breaker game (X, \mathcal{F}) , two players, called *Maker* and *Breaker* take turns in claiming previously unclaimed element of the *board* X , with one of them going first. Game ends when all elements of X are claimed. Set $\mathcal{F} \subseteq 2^X$ is called the family of winning sets. Maker wins the game (X, \mathcal{F}) if she claims all the elements of one $F \in \mathcal{F}$ before the end of the game. Breaker wins otherwise. In this type of games, being the first player is always an advantage, and if the player wins the game as second player then he/she wins as a first player as well. We say that the game is a *Maker’s win*, if she has a strategy to win against every strategy of Breaker. Similarly, a *Breaker’s win* is defined.

Maker–Breaker games are well studied type of *positional games*, combinatorial, perfect information games, with no chance moves. The pair (X, \mathcal{F}) is also known as the *hypergraph of the game*. We refer the interested reader to the book of Beck [2] and the recent monograph of Hefetz, Krivelevich, Stojaković and Szabó [20] for thorough analysis of various types of positional games.

Maker–Breaker games have attracted a lot of attention in the last few decades, and many exciting results about various game have been proven. The standard approach is to

^{*}Department of Mathematics and Informatics, Faculty of Sciences, University of Novi Sad, Trg Dositeja Obradovića 4, 21000 Novi Sad, Serbia. Email: dmi.jovana.jankovic@student.pmf.uns.ac.rs.

[†]Department of Mathematics, Informatics and Physics, Faculty of Philosophy, University of East Sarajevo, Alekse Šantića 1, 71420 Pale, Bosnia and Herzegovina.

[‡]Department of Mathematics and Informatics, Faculty of Sciences, University of Novi Sad, Trg Dositeja Obradovića 4, 21000 Novi Sad, Serbia. Email: mirjana.mikalacki@dmi.uns.ac.rs.

consider the games in which the board is the edge set of a given graph, and the winning sets are some graph theoretic structures, such as the spanning trees, Hamilton cycles, perfect matchings and others. A well studied class of graphs are certainly the complete graphs on n vertices, for sufficiently large integer n . However, it turns out that in many such games Maker wins quite easily when both players claim just one element per move. Chvatál and Erdős first observed this in their seminal paper [5], and introduced *the biased games*, the games in which Maker claims 1 element per move, while Breaker is allowed to claim $b \geq 1$ elements per move. That initiated various types of studies of games where Breaker is given more power, such as already mentioned biased games (for reference see e.g. [17, 18, 22]), or making the board sparser (see e.g. [1, 19, 24]), and other constraints on the way players choose the elements they claim (see e.g. [7, 13, 14]).

One can also consider Maker–Breaker games on graphs in which players claim vertices instead of edges in each turn. One such type is being recently introduced as the *Maker–Breaker domination* game (in the combinatorial setup) by Duchêne, Gledel, Parreau and Renault in [11], inspired by the domination game introduced in [3]. A *dominating set* D of a given graph G is a set of vertices of G , such that every vertex not in D has a neighbour in D . In a Maker–Breaker domination game on a graph G , one player whom we shall call the *Dominator*, claims an unclaimed vertex of G in his turn aiming at claiming the dominating set of a given graph G . The other player, named *Staller*, claims another unclaimed vertex in her turn, with goal to prevent Dominator from achieving his goal. In other words, Staller’s goal is to claim a closed neighbourhood of some vertex in G . The names Dominator and Staller are used to be consistent with the literature considering both standard domination game (for standard rules, see [3] and recent results, see e.g. [4, 10]) and Maker–Breaker domination games.

Also, to keep pace with the current notation in this type of games, Staller will be Maker, and Dominator will play the role of Breaker, as introduced in [11], and used later in [15].

Maker–Breaker total domination game (MBTD game for short) is introduced as a natural counterpart of the Maker–Breaker domination game by Gledel, Henning, Iršič and Klavžar in [15]. Here, given the graph G , the Dominator’s goal is to claim the *total* dominating set of G , i.e. a set D s.t. each vertex of G has a neighbour in D . On the other hand, Staller wins if she claims an open neighbourhood of some vertex v of G .

It is easy to see that Dominator wins the MBTD game on $G = K_n$, for any given $n \geq 2$, no matter who starts the game. Also, for $G = K_1$, the MBTD game is a Staller’s win, as the graph has a unique vertex. Therefore, it is interesting to look at other graphs and characterize them according to the winner of the game.

Following the notation from [15] we say that a graph G is

- \mathcal{D} , if Dominator wins the game
- \mathcal{S} , if Staller wins the game
- \mathcal{N} , if first player wins the game.

Cubic graphs have been studied for quite a while with the respect to the domination number (see e.g. [25]) and also in the domination game, already mentioned above, most

recently in [6]. Moreover, connected cubic graphs are very interesting to study in MBTD game setup, as already noticed in [15]. The authors showed that there are infinitely many connected cubic graphs which are Staller’s win, provided that she plays first. The result is connected with the number of total dominating sets in which the vertex set of a given graph G can be partitioned, introduced by Cockayne, Dawes and Hedetniemi in [8], for which it was later shown in [9] that infinitely many connected cubic graphs exist.

Motivated by the question of Gledel, Henning, Iršič and Klavžar in [15], we study MBTD game on connected cubic graphs (3-regular graphs) and for some classes of connected cubic graphs we are able to give exact characterization which ones are in \mathcal{D} and which are in \mathcal{S} . From [15] we know that

- there are infinitely many examples of connected cubic graphs in which Staller wins the game as the first player.
- no minimum degree condition is sufficient to guarantee that Dominator wins in the game in which Staller is the first player.

Some research on this topic has been conducted previously, although not under the name MBTD game. Namely, in his PhD thesis, [23], Kutz considered the Maker–Breaker games on almost-disjoint hypergraphs of rank three (edges with up to three vertices intersecting in at most one vertex), where the players alternately claim vertices of a given hypergraph. In an almost disjoint hypergraph of rank three it can be decided in polynomial time whether Maker or Breaker wins, as shown in [23].

Looking at the winning sets of Staller in our MBTD game, we would have a hypergraph whose all edges have three vertices (still a rank three hypergraph), but the key difference is that majority of the graphs that we consider are not almost-disjoint, as a lot of intersections exist among the edges. We also look at some graphs whose hypergraph would have almost-disjoint hyperedges (e.g. the union of at least four vertex-disjoint $K_{1,3}$). In this case, the analysis from [23] would require searching through all possible pairs of first moves, and then applying some reductions when Staller is the first player. However, to be able to classify these graphs, we provide in this paper more applicable and explicit winning strategy for the players.

To determine which connected cubic graphs are Dominator’s win and which are Staller’s win, we use the following classification of cubic graphs. In a cubic graph on $n \geq 6$ vertices each vertex has only three possibilities [21]:

1. it lies in two triangles (Figure 1(a)).
2. it lies in one triangle (Figure 1(b))
3. it lies in zero triangles (Figure 1(c))

So, cubic graphs can be classified according to the number of vertices of type 1 (being in two triangles), type 2 (being in one triangle) and type 3 (being in no triangle). Let T_1, T_2

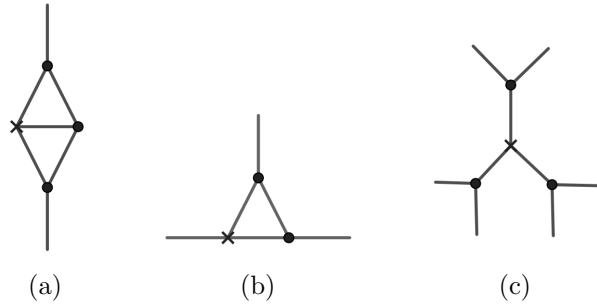


Figure 1: Different possible locations for vertices in cubic graph of order $n \geq 6$. Vertex can lie in (a) two triangles (b) one triangle (c) no triangles

and T_3 denote the number of vertices of type 1, type 2 and type 3, respectively. These three numbers are related by the following formulas [21]:

$$T_1 = 2k_1 \quad T_2 = T_1 + 3k_2 \quad T_1 + T_2 + T_3 = n$$

where k_1 and k_2 are nonnegative integers.

If the cubic graph contains vertices of type 1, then this means that G contains at least one *diamond*, that is, the complete graph on four vertices minus one edge.

Hereinafter, when we say a triangle we refer to an induced K_3 which is not part of a diamond.

We say that a vertex $x \in V(G)$ is adjacent to some triangle $Y \subseteq G$, where $V(Y) = \{y_1, y_2, y_3\}$, if $xy_i \in E(G)$, for some $i \in \{1, 2, 3\}$. Also, we say that two triangles $X \subseteq G$ and $Y \subseteq G$, with the vertex sets $V(X) = \{x_1, x_2, x_3\}$ and $V(Y) = \{y_1, y_2, y_3\}$, are adjacent if $x_i y_j \in E(G)$ for some $i, j \in \{1, 2, 3\}$.

Taking into consideration the possible types of cubic graphs, we prove the following theorems.

Theorem 1.1. *Let G be a cubic graph on $n \geq 6$ which is the union of vertex-disjoint diamonds. Then, the MBTD game on G is \mathcal{D} .*

Theorem 1.2. *Let G be a cubic graph on $n \geq 6$ vertices in which every vertex lies in exactly one triangle, that is, G is the union of vertex-disjoint triangles. If $n = 6$, the graph G is \mathcal{D} . Otherwise, the graph G is \mathcal{S} .*

Theorem 1.3. *Let G be a cubic graph on $n \geq 6$ vertices which is the union of vertex-disjoint triangles and diamonds. Then, there are only two types of such a graph on which Dominator wins, but only as the first player. In all other cases the graph G is \mathcal{S} .*

Definition 1.4 (Watkins [26]). *The generalized Petersen graph $GP(n, k)$, for given $n \geq 3$ and $1 \leq k \leq n - 1$, is a graph whose vertex set is $V(GP(n, k)) = \{u_0, u_1, \dots, u_{n-1}, v_0, v_1, \dots, v_{n-1}\}$ and $E(GP(n, k))$ consists of all edges in form*

$$u_i, u_{i+1} \quad u_i, v_i \quad v_i, v_{i+k},$$

where i is an integer. All subscripts are to be read modulo n .

Generalized Petersen graphs drew lots of attention since their definition. In [15], the authors showed that the prism $P_2 \square C_n$, for $n \geq 3$ is \mathcal{D} . This graph is equivalent to the Generalized Petersen graph $GP(n, 1)$. For the graph $GP(5, 2)$ it is proven in [15] that it is \mathcal{S} . The following theorem gives the characterization of $GP(n, 2)$ for every $n \geq 6$.

Theorem 1.5. *MBTD game on generalized Petersen graph $GP(n, 2)$ for $n \geq 6$ is \mathcal{S} .*

Finally, we are interested in MBTD games on cubic bipartite graphs and the union of bipartite graphs and prove the following.

Theorem 1.6. *Cubic bipartite graph is \mathcal{D} .*

A *claw* is the complete bipartite graph $K_{1,3}$.

Theorem 1.7. *Let G be a connected cubic graph on $n \geq 6$ vertices formed as the union of $k \geq 2$ vertex-disjoint claws. For $k = 2$, G is \mathcal{D} . For $k \geq 3$, the graph G is \mathcal{S} .*

1.1 Preliminaries

For given graph G by $V(G)$ and $E(G)$ we denote its vertex set and edge set, respectively. The order of graph G is denoted by $v(G) = |V(G)|$, and the size of the graph by $e(G) = |E(G)|$.

Assume that the MBTD game is in progress. We denote by d_1, d_2, \dots the sequence of vertices chosen by Dominator and by s_1, s_2, \dots the sequence of vertices chosen by Staller. At any given moment during this game, we denote the set of vertices claimed by Dominator by \mathfrak{D} and the set of vertices claimed by Staller by \mathfrak{S} . As in [16], we say that the game is the D -game if Dominator is the first to play, i.e. one *round* consists of a move by Dominator followed by a move of Staller. In the S -game, one round consists of a move by Staller followed by a move of Dominator. We say that the vertex v is *isolated* by Staller if all neighbours of v are claimed by Staller. The open neighbourhood of a vertex v , denoted by $N_G(v)$, is the set of vertices adjacent to v in G . Graph G is r -regular if every vertex $v \in V(G)$ has degree r . A 3-regular graph is called *cubic graph*.

Definition 1.8. *The Cartesian product $G \square H$ of graphs G and H is the graph with vertex set $V(G \square H) = V(G) \times V(H)$ in which (u, v) is adjacent to (u', v') if either $u = u'$ and $vv' \in E(H)$, or $v = v'$ and $uu' \in E(G)$.*

The circular ladder graph (or prism graph) CL_n is the Cartesian product of a cycle of length $n \geq 3$ and an edge, that is, $CL_n = C_n \square P_2$.

A n -prism graph is equivalent to the generalized Petersen graph $GP(n, 1)$.

We point out some basic properties of the MBTD games given in [15].

Proposition 1.9. *([15], Corollary 2.2(ii)) Let G be a graph. Let V_1, \dots, V_k a partition of $V(G)$ such that $V_i, i \in [k] := \{1, \dots, k\}$, induces a graph on which Dominator wins the MBTD game, then Dominator wins MBTD game on G .*

Proposition 1.10. *([15], Proposition 2.4) Dominator wins in MBTD game on cycle C_4 .*

1.1.1 Traps

Consider the MBTD game on graph G . Let $v \in V(G)$ and let $u_1, u_2, u_3 \in N_G(v)$. Let u_2 and u_3 be free vertices. Let $u_1 \in \mathfrak{S}$ and suppose that it is Staller's turn to make her move. If Staller claims u_2 (or u_3), she creates a *trap* for Dominator, that is, Staller forces Dominator to claim u_3 (or u_2) as otherwise she isolates v .

Double trap. We say that Staller creates a *double trap* $u - v$ in the MBTD game on G , where $u, v \in V(G)$ are free vertices, if after Staller's move Dominator is forced to claim both vertices u and v . Since Dominator can not claim two vertices in one move, in her next move Staller will claim either u or v and isolate either a neighbour of u or a neighbour of v .

If Staller creates a double trap, Dominator loses the game.

Diamond trap. Suppose that the MBTD game on the connected cubic graph G is in progress. Let $Z \subseteq G$ be a diamond with the vertex set $V(Z) = \{z_1, z_2, z_3, z_4\}$ and the edge set $E(Z) = \{z_1z_2, z_2z_3, z_3z_4, z_4z_1, z_2z_4\}$ and suppose that all vertices from $V(Z)$ are free. By claiming z_1 (or z_3) Staller creates a *diamond trap* on Z . That is, she forces Dominator to claim a vertex from $V(Z) \setminus \{z_1\}$ (or $V(Z) \setminus \{z_3\}$), as otherwise, in her next move Staller will claim z_3 (or z_1) and create a double trap $z_2 - z_4$.

Vertex-diamond trap. Suppose that the MBTD game on the connected cubic graph G is in progress. Consider subgraph $G' \subseteq G$ with the vertex set $V(G') = \{v, y_1, y_2, z_1, z_2, z_3, z_4\}$ where the vertices z_1, z_2, z_3 and z_4 form a diamond Z with the edge set $E(Z) = \{z_1z_2, z_2z_3, z_3z_4, z_4z_1, z_2z_4\}$. Let $E(G') = E(Z) \cup \{vy_1, vy_2, vz_1\}$. Let y_2, z_1, z_2, z_3, z_4 be free vertices. Suppose that $y_1 \in \mathfrak{S}$ and it is Staller's turn to make her move. If Staller claims z_1 she creates a *vertex-diamond trap* $y_2 - Z$. That is, she forces Dominator to claim y_2 , as otherwise Staller can isolate v in her next move. Also, Staller has created a diamond trap on Z which forces Dominator to claim $V(Z) \setminus \{z_1\}$. In any case Dominator will lose the game.

1.1.2 Pairing strategy for Dominator.

In the MBTD game played on certain graphs Dominator, to win, will use the pairing strategy. This means that the subset of the board of the game can be partitioned into pairs such that every winning set (i.e. open neighbourhood of a vertex in the graph) contains one of the pairs. When Staller claims an element from some pair, Dominator will respond by claiming the other element from that pair.

2 Graphs from \mathcal{D} and \mathcal{S}

The proof of Theorem 1.1. The vertex set $V(G)$ can be partitioned into 4-sets, each containing a C_4 . So, by Proposition 1.10 and Proposition 1.9 Dominator wins on C_4 , and therefore on diamond. \square

Definition 2.1. *Suppose that the MBTD game on the connected cubic graph G on $n \geq 6$ vertices is in progress.*

1. By G_1 denote an induced subgraph of G with the vertex set $V(G_1) = \{u_0, u_1, u_2, u_3, v_0, v_1, v_2, v_3\}$ where the vertices u_1, u_2, u_3 form a triangle U and the vertices v_1, v_2, v_3 form a triangle V . Let $E(G_1) = E(U) \cup E(V) \cup \{u_0u_1, v_0v_1\}$. The subgraph is illustrated in Figure 2(a).
2. By G_2 denote a subgraph of G with the vertex set $\{x_1, x_2, x_3, u_1, u_2, u_3, v_1, v_2, v_3, z_1, z_2, z_3, v\}$ where the vertices x_1, x_2, x_3 form a triangle X , u_1, u_2, u_3 form a triangle U , v_1, v_2, v_3 form a triangle V , and z_1, z_2, z_3 form a triangle Z . Let $E(G_2) = E(X) \cup E(U) \cup E(V) \cup E(Z) \cup \{v_3v\}$. The subgraph is illustrated in Figure 2(b).
3. By G_3 denote a subgraph of G which contains a triangle U with the vertex set $\{u_1, u_2, u_3\}$, and a diamond Z with the vertex set $\{z_1, z_2, z_3, z_4\}$ and the edge set $E(Z) = \{z_1z_2, z_2z_3, z_3z_4, z_4z_1, z_2z_4\}$. Let $E(G_3) = E(U) \cup E(Z) \cup \{u_2z_1\}$. The subgraph is illustrated in Figure 2(c).
4. By G_4 denote a subgraph of G which contains a triangle U with the vertex set $\{u_1, u_2, u_3\}$ and two diamonds, a diamond Y with the vertex set $\{y_1, y_2, y_3, y_4\}$ and the edge set $E(Y) = \{y_1y_2, y_2y_3, y_3y_4, y_2y_4\}$, and a diamond Z with the vertex set $\{z_1, z_2, z_3, z_4\}$ and the edge set $E(Z) = \{z_1z_2, z_2z_3, z_3z_4, z_4z_1, z_2z_4\}$. Let $E(G_4) = E(U) \cup E(Y) \cup E(Z) \cup \{u_2y_1, u_3z_1\}$. The subgraph is illustrated in Figure 2(d).

To prove Theorem 1.2 and Theorem 1.3 we will need the following lemmas.

Lemma 2.2. *Consider the D-game on G_1 . If $d_1 = u_0$, then G_1 is \mathcal{S} . Also, Staller wins S-game on G_1 .*

Proof. We have $d_1 = u_0$. Then, $s_1 = v_2$. Consider the following cases:

- Case 1. $d_2 \in \{u_1, u_3, v_1\}$. Then, $s_2 = v_3$ which forces $d_3 = v_0$. In her third move, if $d_2 = u_1$, Staller claims v_1 and creates a double trap $u_2 - u_3$, if $d_2 = u_3$, Staller claims u_2 and creates a double trap $u_1 - v_1$, and if $d_2 = v_1$, Staller claims u_1 Staller and creates a double trap $u_3 - u_2$.
- Case 2. $d_2 \in \{u_2, v_3, v_0\}$. Then, by playing $s_2 = u_3$ Staller creates a double trap $u_1 - v_1$. In her third move Staller isolates u_2 or v_3 .

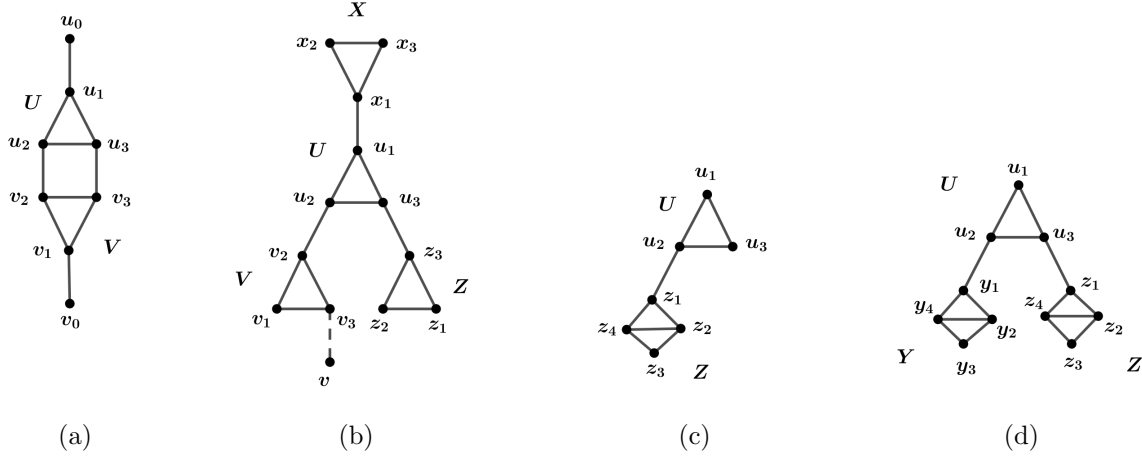


Figure 2: Subgraph (a) G_1 (b) G_2 (Vertex v can belong to $V(Z) \cup V(X)$) (c) G_3 (d) G_4

In the S -game, Staller can pretend that she is the second player and $d_1 = u_0$ and win the game. \square

Lemma 2.3. *Consider the MBTD game on G_2 . Let $u_1 \in \mathfrak{S}$ and suppose that at least the vertices $u_2, u_3, v_1, v_2, v_3, v, z_3$ are free. Suppose that it is Staller's turn to make her move. Then, Staller wins.*

Proof. Staller plays in the following way: $s_1 = u_2$ which forces $d_1 = z_3$ and $s_2 = v_2$ which forces $d_2 = u_3$. By playing $s_3 = v_1$ Staller creates a double trap $v_3 - v$. In her next move Staller isolates either v_2 or v_3 by claiming v_3 or v . \square

Lemma 2.4. *Consider the MBTD game on G_3 . Let $u_1 \in \mathfrak{S}$ and suppose that at least the vertices u_3, z_1, z_2, z_3, z_4 are free. Suppose that it is Staller's turn to make her move. Then, Staller wins.*

Proof. Staller plays $s_1 = z_1$ and creates a vertex-diamond trap $u_3 - Z$. Dominator can not win. \square

Lemma 2.5. *Staller wins the S -game on G_4 .*

Proof. Consider the S -game on G_4 . Staller plays in the following way: $s_1 = y_1$ which forces $d_1 \in \{y_2, y_3, y_4\}$ (a diamond trap on Y), as otherwise Staller will claim y_3 in her second move and then in her third move she can isolate y_2 or y_4 . Next, $s_2 = u_1$ which forces $d_2 = u_3$. By playing $s_3 = z_1$ Staller creates a vertex-diamond trap $u_2 - Z$. \square

Lemma 2.6. *Consider the MBTD game on the connected cubic graph η illustrated in Figure 3. In the D -game, if $d_1 \in \{h_1, h_3\}$, Dominator wins. Otherwise, Staller wins as the second player. In the S -game on η Staller wins.*

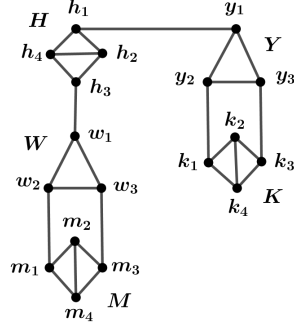


Figure 3: Graph η

Proof. Consider the D -game and let $d_1 \in \{h_1, h_3\}$. W.l.o.g. let $d_1 = h_1$. To dominate vertices from $V(Y) \cup V(K)$ Dominator plays in the following way:

- Case 1. If Staller's first move on $V(Y) \cup V(K)$ is y_1 , Dominator responds with k_1 . To cover the remaining vertices from $V(Y) \cup V(K)$, Dominator will use the pairing strategy on pairs (y_2, k_3) and (k_2, k_4) . If Staller claims y_3 , Dominator will claim an arbitrary free vertex among $\{y_2, k_2, k_3, k_4\}$.
- Case 2. If Staller's first move on $V(Y) \cup V(K)$ is a vertex from $\{y_2, y_3\}$, Dominator responds with y_1 . To dominate the remaining vertices from $V(Y) \cup V(K)$, Dominator will use the pairing strategy on pairs (k_1, k_3) and (k_2, k_4) .
- Case 3. If Staller's first move on $V(Y) \cup V(K)$ is k_1 (or k_3), Dominator responds with k_3 (or k_1). To cover the remaining vertices from $V(Y) \cup V(K)$, Dominator will use the pairing strategy where the pairs are (y_1, y_3) (or (y_1, y_2)) and (k_2, k_4) . If Staller claims y_2 (or y_3), Dominator will claim an arbitrary free vertex from one of the pairs.

To cover vertices from $V(H) \cup V(W) \cup V(M)$ Dominator plays in the following way. First, he makes a pairing (h_2, h_4) and (m_2, m_4) , and applies a pairing strategy there. So, suppose, $h_2, m_2 \in \mathcal{D}$. It is enough to consider the following cases.

- Case 1. If Staller's first move on $V(H) \cup V(W) \cup V(M)$ is h_3 , Dominator responds with w_1 . In order to cover vertices from $V(W) \cup V(M)$ Dominator will use the pairing strategy on pairs (w_2, w_3) and (m_1, m_3) .
- Case 2. If Staller's first move on $V(H) \cup V(W) \cup V(M)$ is w_1 (or w_2), Dominator responds with m_1 (or m_3). In order to cover vertices from $V(H) \cup V(W) \cup V(M)$ Dominator will use the pairing strategy on pairs (w_2, m_3) (or (w_1, m_1)) and (w_3, h_3) .
- Case 3. If Staller's first move on $V(H) \cup V(W) \cup V(M)$ is w_3 , Dominator responds with m_1 . In order to cover vertices from $V(H) \cup V(W) \cup V(M)$ Dominator will use the pairing strategy on pairs (w_2, h_3) and (w_1, m_3) .

Case 4. If Staller's first move on $V(H) \cup V(W) \cup V(M)$ is m_1 (or m_3), Dominator responds with m_3 (or m_1). In order to cover vertices from $V(H) \cup V(W) \cup V(M)$ Dominator will use the pairing strategy on pairs (w_1, w_3) and (w_2, h_3) (or (w_1, w_2) and (w_3, h_3)).

Next, suppose that $d_1 \in \{h_2, h_4\}$. W.l.o.g. let $d_1 = h_2$. Staller plays in the following way: $s_1 = k_1$ which forces $d_2 \in V(K) \setminus \{k_1\}$ (a diamond trap), $s_2 = y_3$ which forces $d_3 = y_1$, $s_3 = h_1$ which forces $d_4 = y_2$ and $s_4 = h_3$ which forces $d_5 = h_4$. Next, $s_5 = w_1$. Afterwards,

- if $d_6 = w_2$ (or $d_6 = w_3$), then $s_6 = m_1$ (or $s_6 = m_3$) and Staller creates a vertex-diamond trap $w_3 - M$ (or $w_2 - M$).
- if $d_6 \in \{m_1, m_2, m_4\}$ (or $d_6 = m_3$), then $s_6 = w_2$ (or $s_6 = w_3$) and Staller creates a double trap $m_3 - w_3$ (or $m_1 - w_2$). In her next move Staller isolates either w_3 or w_1 (or, w_2 or w_1).

Next, suppose that $d_1 \notin V(H)$. W.l.o.g. let $d_1 \in V(Y) \cup V(K)$. Then, Staller plays on the subgraph G_4 with the vertex set $V(W) \cup V(H) \cup V(M)$. By Lemma 2.5, Staller wins. In the the S -game, Staller uses the same strategy. \square

Lemma 2.7. *Consider the MBTD game on the connected cubic graph ω illustrated in Figure 4, where the chain of diamonds adjacent to A can consist of one or more diamonds. In the D -game, if $d_1 = a_1$ Dominator wins, if $d_1 \in V(D_1)$ Staller wins. In the S -game on ω Staller wins.*

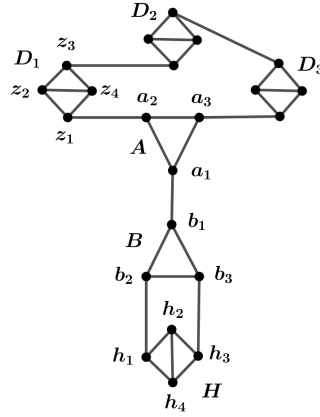


Figure 4: One example of graph ω
Chain of diamonds consists of three diamonds.

Proof. We first look at the D -game on ω . In his first move Dominator claimed a_1 . When Staller plays on a diamond which is different from H , Dominator will apply a pairing strategy on that diamond where one pair consists of two opposite vertices of that diamond and remaining two vertices in diamond form the other pair. Dominator also makes a pairing (a_2, a_3) and (h_2, h_4) , and apply the pairing strategy when Staller plays there. Let $a_2, h_2 \in \mathcal{D}$.

- If Staller's first move on $V(B) \cup V(H)$ is b_1 , Dominator responds with h_1 . If Staller in her next move claims a vertex from $\{b_2, b_3, h_3\}$, Dominator claims the free vertex from $\{b_2, h_3\}$ and in this way he covers all vertices from the graph.
- If Staller's first move on $V(B) \cup V(H)$ is b_2 (or b_3), Dominator responds with h_1 (or h_3). If Staller in her next move claims a vertex from $\{b_1, h_3, b_3\}$ (or $\{b_1, h_1, b_2\}$), Dominator claims the free vertex from $\{b_1, h_3\}$ (or $\{b_1, h_1\}$) and he covers all vertices.
- If Staller's first move on $V(B) \cup V(H)$ is h_1 (or h_3), Dominator responds with h_3 (or h_1). In his next move Dominator claims a free vertex from $\{b_1, b_3\}$ (or $\{b_1, b_2\}$).

Let $d_1 \in V(D_1)$. Then, Staller, in her first move plays $s_1 = b_1$. If $d_2 \in V(A) \cup V(B) \cup V(D_i)$, then Staller can create $b_3 - H$ trap or $b_2 - H$ trap by claiming h_1 if $d_2 = b_2$, or h_3 if $d_2 = b_3$. So, Dominator needs to play his second move on H . If $d_2 \in \{h_1, h_2, h_4\}$ (or $d_2 = h_3$), then $s_2 = b_2$ (or $s_2 = b_3$) forcing $d_3 = h_3$ (or $d_3 = h_1$). Next, $s_3 = a_1$ forcing $d_4 = b_3$ (or $d_4 = b_2$).

If chain of diamonds consist only of one diamond, say D_1 , then if $d_1 \in \{z_1, z_2, z_4\}$ Staller plays $s_4 = a_2$ creating $z_3 - a_3$ trap, and if $d_1 = z_3$ Staller plays $s_4 = a_3$ creating $z_1 - a_2$. Otherwise, if chain has more than one diamond, then Staller claims a vertex from a diamond incident with a_3 and creates vertex-diamond trap.

Consider the S -game. Staller plays in the following way: $s_1 = h_1$ which forces $d_1 \in V(H) \setminus \{h_1\}$ (a diamond trap), $s_2 = b_1$ which forces $d_2 = b_3$, $s_3 = z_1$ which forces $d_3 \in V(D_1) \setminus \{z_1\}$ (a diamond trap) and $s_4 = a_3$. Staller creates a double trap $a_1 - a_2$. \square

In the following we look at the graph on n vertices that consists on vertex-disjoint triangles and prove that Staller wins even as the second player if $n > 6$.

The proof of Theorem 1.2. First, let $n = 6$. Consider the S -game. Let U be a triangle with the vertex set $\{u_1, u_2, u_3\}$ and let V be a triangle with the vertex set $\{v_1, v_2, v_3\}$. Let $u_i v_i \in E(G)$ for every $i \in \{1, 2, 3\}$. W.l.o.g. suppose that Staller in her first move chooses a vertex u_1 . Then Dominator will choose a vertex from the opposite triangle V which is not adjacent to u_1 , say a vertex v_2 . In her second move Staller needs to claim u_2 , as otherwise Dominator will win after his second move. If $s_2 = u_2$, then $d_2 = v_3$. In his third move Dominator will claim a free vertex from $\{v_1, u_3\}$ and win. One of these two vertices must be free after Staller's third move.

Let $n > 6$. Since the graph is cubic, the number of vertices needs to be even, so we have the even number of triangles. Consider the D -game on graph G . Suppose that in his first move Dominator claims some vertex a_1 which belongs to a triangle A with the vertex set $V(A) = \{a_1, a_2, a_3\}$.

Case 1 Let $a_1 b_1 \in E(G)$ where b_1 is a vertex of some triangle B with the vertex set $V(B) = \{b_1, b_2, b_3\}$ and there is only one edge between A and B . We consider the following subcases.

1.i. Triangle B is adjacent to one more triangle, say Y with the vertex set $V(Y) = \{y_1, y_2, y_3\}$. So, there are two edges between B and Y , say b_2y_2 and b_3y_3 . Let $y'_1 \in N_G(y_1)$ for some $y'_1 \in V(G) \setminus \{y_2, y_3\}$. Consider a subgraph induced by $\{a_1, b_1, b_2, b_3, y_1, y_2, y_3, y'_1\}$ where a_1 is claimed by Dominator and now it is Staller's turn to make her move. By Lemma 2.2 it follows that Staller wins.

1.ii. Triangle B is adjacent to two more triangles, say Y with the vertex set $V(Y) = \{y_1, y_2, y_3\}$, and W with the vertex set $V(W) = \{w_1, w_2, w_3\}$. Let $b_2w_2, b_3y_3 \in E(G)$. Let $w'_1 \in N_G(w_1)$ for some $w'_1 \in V(G) \setminus \{w_2, w_3\}$ and let $w'_3 \in N_G(w_3)$ for some $w'_3 \in V(G) \setminus \{w_1, w_2\}$.

In her first move Staller plays $s_1 = b_1$. The rest of the Staller's strategy depends on Dominator's second move. So, we analyse the following cases.

1.ii.1. $d_2 \in V(A)$.

Then, $s_2 = b_2$ which forces $d_3 = y_3$, $s_3 = w_2$ which forces $d_4 = b_3$. If $w'_1 = a_i$ (or $w'_3 = a_i$), for some $i \in \{2, 3\}$, and a_i is claimed by Dominator in his second move, then $s_4 = w_1$ (or w_3). In this way Staller creates a double trap $w_3 - w'_3$ (or $w_1 - w'_1$). In her next move Staller isolates either w_2 or w_3 (or, either w_2 or w_1). Otherwise, Staller can claim any of the vertices w_1, w_3 in her fourth move and then play in the same way as above, i.e. she creates a double trap and wins in the following move.

1.ii.2. $d_2 \in V(B)$.

W.l.o.g. let $d_2 = b_3$.

1.ii.2.1. Triangle Y is adjacent to two more triangles, say K with the vertex set $V(K) = \{k_1, k_2, k_3\}$ and $H = \{h_1, h_2, h_3\}$. Let $y_2k_2 \in E(G)$ and $y_1h_1 \in E(G)$. Then, $s_2 = y_3$ which forces $d_3 = b_2$, $s_3 = y_1$ which forces $d_4 = k_2$ and $s_4 = h_1$ which forces $d_5 = y_2$. Next, $s_5 = h_2$ and Staller creates a double trap $h_3 - h'_3$, where $h'_3 \in N_G(h_3)$ for some $h'_3 \in V(G) \setminus \{h_1, h_2\}$. In her next move Staller isolates either h_1 or h_3 .

The statement holds also if $h'_3 \in (V(K) \setminus \{k_2\}) \cup (V(W) \setminus \{w_2\}) \cup (V(A) \setminus \{a_1\})$.

It could be the case that one of these triangles K, H is the triangle W . The statement also holds in this case.

If $K = A$, the statement also holds. If $H = A$, the proof is very similar, but simpler, as the Staller wins in her fifth move.

1.ii.2.2. Triangle Y is adjacent to one more triangle, say $K \neq A$ with the vertex set $V(K) = \{k_1, k_2, k_3\}$. Let $y_1k_1, y_2k_2 \in E(G)$. Assume that $k'_3 \in N_G(k_3)$ for some $k'_3 \in V(G) \setminus \{k_1, k_2\}$. Since the graph induced by $\{b_3, y_1, y_2, y_3, k_1, k_2, k_3, k'_3\}$ is a variant of graph G_1 where $b_3 \in \mathfrak{D}$. According to Lemma 2.2, Staller wins.

If $K = W$, the statement also holds.

1.ii.2.3. Triangle Y is adjacent to triangle A and there are two edges between them, say y_2a_2, y_1a_3 .

Then, Staller plays $s_2 = y_3$ which forces $d_3 = b_2$. By playing $s_3 = a_2$ Staller creates a double trap $a_3 - y_1$. In her next move Staller isolates either a_1 or y_2 .

1.ii.3. $d_2 \in V(Y) \cup V(W)$. W.l.o.g. let $d_2 \in V(Y)$.

Let $w'_1 \in N_G(w_1)$ and let $w'_3 \in N_G(w_3)$. Consider the following subcases.

1.ii.3.1. $d_2 \neq y_3$. W.l.o.g. let $d_2 = y_1$.

Then, $s_2 = w_2$ which forces $d_3 = b_3$ and $s_3 = b_2$ which forces $d_4 = y_3$. It is enough to consider the case if one of the vertices w'_1 and w'_3 is the vertex y_1 . Let, for example, $w'_1 = y_1$. Then, $s_4 = w_1$ and Staller creates a double trap $w_3 - w'_3$. In her next move Staller isolates either w_2 or w_3 .

Staller plays in the same way if $y_1 \notin \{w'_1, w'_3\}$.

1.ii.3.2. $d_2 = y_3$.

Then, $s_2 = w_2$ which forces $d_3 = b_3$, $s_3 = w_1$ which forces $d_4 = w'_3$ and $s_4 = w_3$. Staller creates a double trap $b_2 - w'_1$. In her next move Staller isolates either w_2 or w_1 .

Case 2 Let C be a triangle with the vertex set $V(C) = \{c_1, c_2, c_3\}$ such that $a_1c_1, a_2c_2 \in E(G)$. Suppose that C is adjacent to some triangle B with the vertex set $V(B) = \{b_1, b_2, b_3\}$. If $b_ia_3 \notin E(G)$, for all $i \in \{1, 2, 3\}$, then the analysis from Case 1 can be applied on B . Otherwise, consider another triangle T adjacent to B and apply the adjusted analysis from Case 1 on triangle T and its neighbours.

According to the analysed cases it follows that the graph G is \mathcal{S} . □

Next, we consider the connected cubic graph that consists of vertex-disjoint triangles and diamonds, and prove the Theorem 1.3.

The proof of Theorem 1.3. Consider the following cases.

Case 1 Let $d_1 = a_1 \in V(A)$ where A is a triangle with the vertex set $V(A) = \{a_1, a_2, a_3\}$. Consider the following cases.

1.i. The vertex a_1 is adjacent to a diamond H with the vertex set $V(H) = \{h_1, h_2, h_3, h_4\}$ where $E(H) = \{h_1h_2, h_2h_3, h_3h_4, h_4h_1, h_2h_4\}$. Let $a_1h_1 \in E(G)$. Consider the following subcases.

1.i.1. Vertex a_2 is adjacent to a diamond D_1 different from H and vertex a_3 is adjacent to a diamond D_2 (which can be equal to one of the diamonds D_1, H).

Since the number of triangles must be even there exists at least one more triangle, say X , with the vertex set $V(X) = \{x_1, x_2, x_3\}$ such that one of the cases 1.i.1.a., 1.i.1.b., 1.i.1.c., 1.i.1.d., 1.i.1.e. and 1.i.1.f. from Figure 5 holds.

For cases 1.i.1.a. and 1.i.1.b, consider S -game on the subgraph G_4 which vertex set is a union of $V(X)$ and vertex sets of two diamonds that are adjacent to X . By Lemma 2.5, Staller wins.

1.i.1.c. In case that one of the triangles Y and W is adjacent to k_3 , then, w.l.o.g. suppose that triangle W is adjacent to k_3 . Then, Staller plays in the following way:

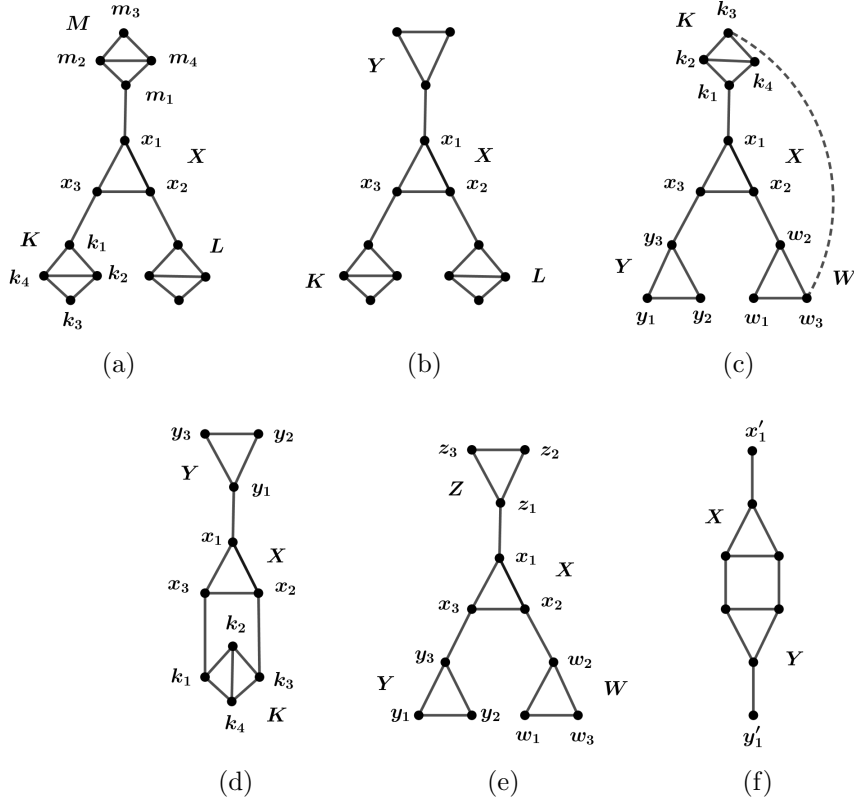


Figure 5: Subgraph (a) Case 1.i.1.a. (b) Case 1.i.1.b. (c) Case 1.i.1.c. (d) Case 1.i.1.d. (e) Case 1.i.1.e. (f) Case 1.i.1.f.

$s_1 = k_1$ which forces $d_2 \in V(K) \setminus \{k_1\}$ (a diamond trap), $s_2 = x_2$ which forces $d_3 = x_3$ and $s_3 = y_3$ which forces $d_4 = x_1$. Triangle Y can be adjacent to some diamonds and/or triangles. The vertices of these diamonds and/or triangles together with $V(Y)$ form one of the subgraphs G_1 , G_2 or G_3 . According to the lemmas 2.2, 2.3 and 2.4, Staller wins.

1.i.1.d. Staller plays in the following way:

$s_1 = k_1$ which forces $d_2 \in V(K) \setminus \{k_1\}$ (a diamond trap), $s_2 = x_2$ which forces $d_3 = x_1$ and $s_3 = y_1$ which forces $d_4 = x_3$. Triangle Y can be adjacent to some diamonds and/or triangles. Vertices of these diamonds and/or triangles together with $V(Y)$ form one of the subgraphs G_1 , G_2 or G_3 . According to the lemmas 2.2, 2.3 and 2.4, Staller wins.

1.i.1.e. If the triangles X, Y, Z, W are adjacent only to triangles, then we can use the analysis from the proof of Theorem 1.2. Case 1 where $X = B, Z = A$ and $V(Z) \not\subseteq \mathfrak{D}$. Otherwise, if at least one of the triangles are adjacent to diamond then we can have a subgraph from Figure 5 (b), (c) or (d) for which we can apply an analysis from the corresponding Case 1.i.1.b, 1.i.1.c or 1.i.1.d.

1.i.1.f. Consider the S -game on the subgraph G_1 with the vertex set $V(X) \cup V(Y) \cup \{x'_1, y'_1\}$. By Lemma 2.2, Staller wins.

1.i.2. The vertices a_2 and a_3 are adjacent to the same triangle, say B , where $a_2b_2, a_3b_3 \in E(G)$.

1.i.2.a. B is adjacent to a triangle Y with the vertex set $V(Y) = \{y_1, y_2, y_3\}$. Let $b_1y_1 \in E(G)$. Then, there exists at least one more triangle, X such that one of the cases from Figure 5 can occur, so adjusted analysis from Case 1.i.1. can be applied.

1.i.2.b. B is adjacent to a diamond K with the vertex set $V(K) = \{k_1, k_2, k_3, k_4\}$ where $E(K) = \{k_1k_2, k_2k_3, k_3k_4, k_4k_1, k_2k_4\}$. Let $b_1k_1 \in E(G)$. Then, $s_1 = k_1$ forces $d_2 = V(K) \setminus \{k_1\}$, $s_2 = b_2$ forces $d_3 = b_3$, $s_3 = a_3$ forces $d_4 = b_1$ and $s_4 = h_1$ creates a vertex-diamond trap $a_2 - H$.

1.i.2.c. B is adjacent to a diamond H , that is, $b_1h_3 \in E(G)$. Since induced subgraph with the vertex set $V(A) \cup V(B) \cup V(H)$ is a connected cubic graph, it follows that this graph is the graph G on 10 vertices.

In her first move Staller plays $s_1 = b_1$. Then

- if $d_2 = h_1$, Staller plays $s_2 = b_3$ which forces $d_3 = a_2$. Next, $s_3 = b_2$ and Staller creates a double trap $a_3 - h_3$. In her next move she isolates either b_3 or b_1 .
- if $d_2 \in V(H) \setminus \{h_1\}$, Staller plays $s_2 = a_2$ which forces $d_3 = b_3$. Next, $s_3 = a_3$ and Staller creates a double trap $h_1 - b_2$. In her next move she isolates either a_1 or b_3 .
- if $d_2 = a_2$ (or $d_2 = a_3$), Staller plays $s_2 = b_2$ (or $s_2 = b_3$) which forces $d_3 = a_3$ (or $d_3 = a_2$). Next, $s_3 = h_3$ and Staller creates a vertex-diamond trap $b_3 - H$ (or $b_2 - H$).
- if $d_2 = b_2$ ($d_2 = b_3$), Staller plays $s_2 = a_2$ (or $s_2 = a_3$) which forces $d_3 = b_3$ (or $d_3 = b_2$). Next, $s_3 = h_1$ and Staller creates a vertex-diamond trap $a_3 - H$ (or $a_2 - H$).

It follows that the graph G is \mathcal{S} .

1.i.3. The vertex a_2 is adjacent to a triangle, say T with the vertex set $V(T) = \{t_1, t_2, t_3\}$ and the vertex a_3 is adjacent to a triangle, say B with the vertex set $\{b_1, b_2, b_3\}$. Let $a_2t_2, a_3b_3 \in E(G)$.

There exists at least one more triangle, say X with the vertex set $V(X) = \{x_1, x_2, x_3\}$. If X is not adjacent to any of B, T , then one of the cases from Figure 5 can occur, so adjusted analysis from Case 1.i.1 can be applied.

If X is adjacent to a triangle B or T and there are two edges between them, then we can use Lemma 2.2, as we have subgraph G_1 .

Suppose that X is adjacent to at least one of the triangles B and T and there is only one edge between X and that triangle. Let $x_1b_1 \in E(G)$. Staller plays in the following way: $s_1 = h_1$ forcing $d_2 \in V(H) \setminus \{h_1\}$, $s_2 = a_3$ forcing $d_3 = a_2$, $s_3 = b_2$ forcing $d_4 = b_1$ and $s_4 = x_1$ forcing $d_5 = b_3$.

If none of x_2 and x_3 is not adjacent to H then triangles and/or diamonds adjacent to X together with $V(X)$ can form one of the subgraphs G_1 , G_2 or G_3 and according to the lemmas 2.2, 2.3, and 2.4, Staller wins the game on these subgraphs.

If x_2 is adjacent to H and x_3 is adjacent to some other diamond K , then we can use subgraph G_3 with $V(G_3) = V(X) \cup V(K)$, and according to Lemma 2.4, Staller wins. Otherwise, suppose that x_2 is adjacent to H and x_3 is adjacent to triangle, say Y with the vertex set $V(Y) = \{y_1, y_2, y_3\}$ where $x_3y_3 \in E(G)$. Then, $s_5 = y_3$ forcing $d_6 = x_2$. Triangle Y can be adjacent to some diamonds and/or triangles. The vertices of these triangles and/or diamonds different from A and H , which are adjacent to Y , together with $V(Y)$ and their neighbours form one of the subgraphs G_1 , G_2 or G_3 . According to the lemmas 2.2, 2.3, or 2.4, Staller wins the game on these subgraphs. If $x_3t_3 \in E(G)$, then $s_5 = t_3$ forces $d_6 = x_2$. If t_1 is adjacent to a diamond then consider subgraph G_3 and according to Lemma 2.4, Staller wins. Let t_1 be adjacent to a triangle W with the vertex set $V(W) = \{w_1, w_2, w_3\}$ and let $t_1w_1 \in E(G)$. Then Staller plays $s_6 = w_1$ which forces $d_7 = t_2$. Triangle W can be adjacent to triangles and/or diamonds different from A, X, H . Vertices of these triangles and/or diamonds together with W can form one of the subgraphs G_1, G_2 or G_3 . So, according to lemmas 2.2, 2.3 or 2.4, Staller wins.

1.i.4. Let a_2 be adjacent to a diamond and a_3 to a triangle B with the vertex set $V(B) = \{b_1, b_2, b_3\}$ and let $a_3b_3 \in E(G)$.

If b_1 and b_2 are adjacent to two different diamonds, then consider subgraph G_4 and according to Lemma 2.5 Staller wins.

If b_1 and b_2 are adjacent to the same diamond K with the vertex set $V(K) = \{k_1, k_2, k_3, k_4\}$ and the edge set $E(K) = \{k_1k_2, k_2k_3, k_3k_4, k_4k_1, k_2k_4\}$. Let $b_1k_1, b_2k_3 \in E(G)$. Then, Staller plays in the following way: $s_1 = h_1$ forcing $d_2 \in V(H) \setminus \{h_1\}$, $s_2 = a_3$ forcing $d_3 = a_2$ and $s_3 = b_1$ forcing $d_4 = b_2$. By playing $s_4 = k_3$ Staller creates $b_3 - K$ trap.

Otherwise, consider some triangle X and the very similar analysis from previous Case 1.i.3 could be used.

So, the graph G is \mathcal{S} .

1.ii. The vertex a_1 is adjacent to a triangle, say B with the vertex set $V(B) = \{b_1, b_2, b_3\}$. Let $a_1b_1 \in E(G)$. Consider the following subcases.

1.ii.1 The vertex b_2 is adjacent to some diamond, say H , and the vertex b_3 is adjacent to a diamond, say K . Consider the S -game on the subgraph G_4 with the vertex set $V(B) \cup V(H) \cup V(K)$. By Lemma 2.5, Staller wins. So, G is \mathcal{S} .

1.ii.2 The vertices b_2 and b_3 are adjacent to the same diamond, say H with the vertex set $V(H) = \{h_1, h_2, h_3, h_4\}$ and the edge set $E(H) = \{h_1h_2, h_2h_3, h_3h_4, h_4h_1, h_2h_4\}$, where $b_2h_1, b_3h_3 \in E(G)$.

- 1.ii.2.a. If there are no more triangles in the graph G , then the vertices a_2 and a_3 are adjacent to the chain of diamonds. We have a graph ω from Figure 4. According to Lemma 2.7, Dominator wins as the first player.
- 1.ii.2.b. Otherwise, suppose that graph contains more triangles. If both a_2 and a_3 are adjacent to some diamonds which do not form a chain of diamonds, then consider some triangle X which could not be adjacent either to A or B . One of the cases from Figure 5 has to occur, so adjusted analysis from Case 1.i.1 can be applied.
- 1.ii.2.c. At least one of a_2, a_3 are adjacent to some triangle. Let Y be a triangle with the vertex set $V(Y) = \{y_1, y_2, y_3\}$ such that $a_2y_2 \in E(G)$.
 If Y is adjacent to some diamond K with the vertex set $V(K) = \{k_1, k_2, k_3, k_4\}$ and the edge set $E(K) = \{k_1k_2, k_2k_3, k_3k_4, k_4k_1, k_2k_4\}$, so there is at least one edge between Y and K , say $y_1k_1 \in E(G)$. Staller plays in the following way: $s_1 = k_1$ forcing $d_2 \in V(K) \setminus \{k_1\}$, $s_2 = y_3$ forcing $d_3 = y_2$, $s_3 = a_2$ forcing $d_4 = y_1$, $s_4 = b_1$ forcing $d_5 = a_3$ and $s_5 = h_1$, so Staller creates $b_3 - H$ trap.
 If y_1 and y_3 are adjacent to the same triangle, then consider subgraph G_1 of a given graph, so according to Lemma 2.2, Staller wins.
 Otherwise, suppose that y_1 is adjacent to a triangle W with the vertex set $V(W) = \{w_1, w_2, w_3\}$ and let $y_1w_1 \in E(G)$, and y_3 is adjacent to a triangle T . If there is no edge between A and W , or if $T = A$, then Staller plays in the following way: $s_1 = h_1$ which forces $d_2 \in V(H) \setminus \{h_1\}$, $s_2 = b_1$ which forces $d_3 = b_3$, $s_3 = a_2$ which forces $d_4 = a_3$, $s_4 = y_3$ which forces $d_5 = y_1$ and $s_5 = w_1$ which forces $d_6 = y_2$. Triangle W can be adjacent to some triangles and/or diamonds different from A, B and H . Vertices of these diamonds and/or triangles together with $V(W)$ form one of the subgraphs G_1, G_2 or G_3 . According to the lemmas 2.2, 2.3 and 2.4, Staller wins.
 Otherwise, if there is an edge between A and W , then the analysis above can be applied on triangle T and its neighbours, instead of W .
- 1.ii.3** The vertex b_2 is adjacent to a diamond, say H with the vertex set $V(H) = \{h_1, h_2, h_3, h_4\}$, where $b_2h_1 \in E(G)$ and vertex b_3 is adjacent to a triangle, say W , with the vertex set $V(W) = \{w_1, w_2, w_3\}$, where $b_3w_3 \in E(G)$. If W is the part of a subgraph G_1 , that is W is adjacent to one more triangle and there are two edges between them, then by Lemma 2.2, Staller wins. Otherwise, Staller plays in the following way:
 $s_1 = h_1$ which forces $d_2 \in V(H) \setminus \{h_1\}$ (a diamond trap), $s_2 = b_1$ which forces $d_3 = b_3$, $s_3 = w_3$ which forces $d_4 = b_2$. Triangle W can be adjacent to diamonds and/or triangles.
- 1.ii.3.a. If these diamonds and/or triangles are different from A and H , then vertices of these diamonds and/or triangles together with $V(W)$ form one of the subgraphs G_2 or G_3 . According to the lemmas 2.3 and 2.4, Staller wins.
- 1.ii.3.b. If at least one of the vertices w_1, w_2 is adjacent to A , e.g. let $w_2a_2 \in E(G)$, then

by playing $s_4 = a_2$ Staller creates a double trap $a_3 - w_1$. In her next move Staller isolates either a_1 or w_2 .

1.ii.3.c. If w_2 is adjacent to some diamond K with the vertex set $V(K) = \{k_1, k_2, k_3, k_4\}$, where $w_2 k_1 \in E(G)$, then Staller plays $s_4 = k_1$ and creates a vertex-diamond trap $w_1 - K$.

1.ii.3.d. If $w_1 h_3 \in E(G)$ and w_2 is adjacent to some triangle different from A , say R , with the vertex set $V(R) = \{r_1, r_2, r_3\}$ where $w_2 r_2 \in E(G)$. Then, Staller plays $s_4 = r_2$ and forces $d_5 = w_1$. Next,

- if there is at least one edge between R and A , say $a_3 r_3$, then Staller plays $s_5 = a_3$ and creates a double trap $a_2 - r_1$. In her next move she isolates a_1 or r_3 .
- if there are no edges between R and A , then R is adjacent to other diamonds and/or triangles. The vertices of these diamonds and/or triangles together with $V(R)$ form one of the subgraphs G_1, G_2 or G_3 . According to the lemmas 2.2, 2.3 or 2.4, Staller wins.

So, G is \mathcal{S} .

1.ii.4 The vertex b_2 is adjacent to a triangle, say W , with the vertex set $V(W) = \{w_1, w_2, w_3\}$, where $b_2 w_2 \in E(G)$ and the vertex b_3 is adjacent to a triangle, say Y , with the vertex set $V(Y) = \{y_1, y_2, y_3\}$, where $b_3 y_3 \in E(G)$.

Depending of the type of the neighbours of triangle W we can use the adjusted analysis from the proof of Theorem 1.2 for the Case 1.ii or analysis from the previous Case 1.ii.3. So, the graph G is \mathcal{S} .

1.iii. The vertex a_1 is adjacent with triangle B with the vertex set $V(B) = \{b_1, b_2, b_3\}$ and there are two edges between them, $a_1 b_1, a_2 b_2 \in E(G)$.

If there exists a diamond, say H adjacent to B or connected with B by a path of triangles (see Figure 6), then Staller for her first move plays h_1 , and then follows the strategy illustrated on Figure 6. She creates $a_3 - b_3$ trap.

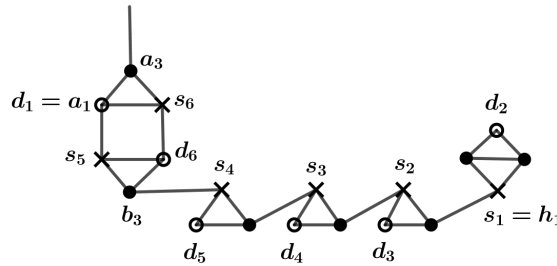


Figure 6: Possible situation for Case 1.iii.

Otherwise, the adjusted analysis from Case 2 in the proof of Theorem 1.2 can be applied to prove that Staller wins.

Case 2 $d_1 \in V(Z)$ where Z is a diamond with the vertex set $V(Z) = \{z_1, z_2, z_3, z_4\}$ and the edge set $E(Z) = \{z_1z_2, z_2z_3, z_3z_4, z_4z_1, z_2z_4\}$. Suppose that $d_1 \in \{z_1, z_2\}$. Consider the following subcases.

- 2.i.** If both z_1 and z_3 are adjacent to some diamonds then there exists a triangle X adjacent to some triangles or diamonds different from Z , such that one of cases from Figure 5 can occur. So, adjusted analysis from Case 1.i.1 can be applied.
- 2.ii.** Suppose that z_1 is adjacent to a diamond and z_3 is adjacent to a triangle, say B . Adjusted analysis from Case 1.ii can be applied on B to prove that Staller wins.
- 2.iii.** Suppose that z_1 is adjacent to a triangle A with the vertex set $V(A) = \{a_1, a_2, a_3\}$ and let $z_1a_3 \in E(G)$ and z_3 is adjacent to a diamond.
 If a_1 is adjacent to a diamond H and a_2 is adjacent to a diamond K , then we can consider subgraph G_4 on which, by Lemma 2.5, Staller wins.
 If a_1 and a_2 are adjacent to the same diamond, then we can find some triangle X adjacent to some triangles and/or diamonds different from A and Z . So, one case from Figure 5 can occur and adjusted analysis from Case 1.i.1 can be applied.
 If triangle A is adjacent to some triangle B with the vertex set $V(B) = \{b_1, b_2, b_3\}$ and are two edges between A and B then we can consider subgraph G_1 and by Lemma 2.2 Staller wins. Otherwise, if there is only one edge between A and B , then, we can use adjusted analysis from Case 1.ii.
- 2.iv.** The vertex z_1 is adjacent to a triangle, say A , with the vertex set $V(A) = \{a_1, a_2, a_3\}$, where $z_1a_1 \in E(G)$ and the vertex z_3 is adjacent to a triangle, say B , with the vertex set $V(B) = \{b_1, b_2, b_3\}$, where $z_3b_1 \in E(G)$. If there are two edges between A and B , let $a_2b_2, a_3b_3 \in E(G)$. Consider the MBTD game on the subgraph G_1 with the vertex set $V(A) \cup V(B) \cup \{z_1, z_3\}$. By Lemma 2.2, Staller wins. So, G is \mathcal{S} .

Next, suppose that there is one edge between A and B , and let $a_3b_3 \in E(G)$.

If graph G contains only these two triangles A and B , then suppose that triangle A is adjacent to a diamond, say K , with the vertex set $V(K) = \{k_1, k_2, k_3, k_4\}$ and $E(K) = \{k_1k_2, k_2k_3, k_3k_4, k_4k_1, k_2k_4\}$. Let $a_2k_1 \in E(G)$. We differentiate between the following cases:

- If $b_2k_3 \in E(G)$, Staller plays in the following way: $s_1 = a_1$ which forces Dominator to claim a vertex from $V(K) \cup \{a_3\}$, as otherwise if Staller claims k_1 in her second move she will create a vertex-diamond trap $a_3 - K$.
 If $d_2 = a_3$, then $s_2 = b_3$ which forces $d_3 = a_2$, $s_3 = b_2$ which forces $d_4 = z_3$. Next, $s_4 = k_3$ and Staller creates a vertex-diamond trap $b_1 - K$.
 Otherwise, if $d_2 = k_1$ (or $d_2 \in \{k_2, k_3, k_4\}$), then $s_2 = b_3$ which forces $d_3 = a_2$, $s_3 = b_2$ which forces $d_4 = z_3$. Next, $s_4 = b_1$ (or $s_4 = a_3$) and Staller creates a double trap $a_3 - k_3$ (or $k_1 - b_1$). In her next move Staller isolates either b_3 or b_2 (or, a_2 or b_3). So, G is \mathcal{S} .
- Triangle B is not adjacent to a diamond K . Then, there exists at least one more diamond, say M different from K with the vertex set $V(M) = \{m_1, m_2, m_3, m_4\}$

adjacent to B , where $b_2m_1 \in E(G)$. Staller plays in the following way:

$s_1 = m_1$ which forces $d_2 \in V(M) \setminus \{m_1\}$ (a diamond trap), $s_2 = b_3$ which forces $d_3 = b_1$ and $s_3 = a_1$ which forces $d_4 = a_2$. Next, $s_4 = k_1$ and Staller creates a vertex-diamond trap $a_3 - K$. Dominator can not win. So, G is \mathcal{S} .

Otherwise, graph G contains at least four triangles. Consider some triangle X different from A and B . One of the cases from Figure 5 must hold and adjusted analysis from Case 1.i.1 can be applied. So, G is \mathcal{S} .

Next, suppose there are no edges between A and B .

If graph G contains only these two triangles A and B , then consider the following

- Let K with the vertex set $V(K) = \{k_1, k_2, k_3, k_4\}$ be a diamond adjacent to A where $a_2k_1 \in E(G)$, and let M with the vertex set $V(M) = \{m_1, m_2, m_3, m_4\}$ be a diamond adjacent to B , where $b_2m_1 \in E(G)$. If $a_3k_3, b_3m_3 \in E(G)$, then we have the graph η (see Figure 3). By Lemma 2.6, if $d_1 \in \{z_1, z_3\}$, Dominator wins in the D -game. Otherwise, Staller wins.
- Otherwise, at least one of the triangles A, B is adjacent to two more diamonds (different from Z). Let K and L be two diamonds with the vertex sets $V(K) = \{k_1, k_2, k_3, k_4\}$ and $V(L) = \{l_1, l_2, l_3, l_4\}$, respectively, such that $a_2k_1, a_3l_1 \in E(G)$. Staller plays on subgraph G_4 with the vertex set $V(A) \cup V(K) \cup V(L)$. By Lemma 2.5, Staller wins. Statement also holds if $L = M$. So, G is \mathcal{S} .

Otherwise, graph G contains at least four triangles. Consider some triangle X different from A and B . One of the cases from Figure 5 must hold and adjusted analysis from Case 1.i.1 can be applied. So, G is \mathcal{S} .

2.v. Vertices z_1 and z_3 are adjacent to the same triangle, say A . Then, we can have situations from Figure 7. If we have Case 2.v.(a), then there exists a triangle X such that one of the cases from Figure 5 must hold and adjusted analysis from Case 1.i.1 can be applied.

If it is Case 2.v.(b), then according to Lemma 2.7, since $d_1 \in \{z_1, z_2\}$, Staller wins.

For Case 2.v.(c) consider subgraph G_4 on $V(B) \cup V(H) \cup V(K)$. By Lemma 2.5, Staller wins. For Case 2.v.(d) we can apply adjusted analysis from Case 1.ii.3.

For Case 2.v.(e) we can apply adjusted analysis from Case 1.ii.4. □

Before we give the proof for Theorem 1.5, we give the winning strategy Dominator in the MBTD game on $\mathcal{G}_1 = GP(n, 1)$ where $n \geq 3$. Note that it is already proven in [15] that $GP(n, 1)$ is \mathcal{D} (precisely, the authors considered the prism $P_2 \square C_n$, which is equivalent to $GP(n, 1)$). Here we give a shorter proof for that.

Claim 2.8. *MBTD game on $GP(n, 1)$, $n \geq 3$ is \mathcal{D} .*

Proof. Let $V(\mathcal{G}_1) = \{u_1, u_2, \dots, u_n, v_1, v_2, \dots, v_n\}$ and let $E(\mathcal{G}_1) = \{u_{i-1}u_i, v_{i-1}v_i | i \in \{2, \dots, n\}\} \cup \{u_1u_n, v_1v_n\} \cup \{u_i v_i | i \in \{1, \dots, n\}\}$.

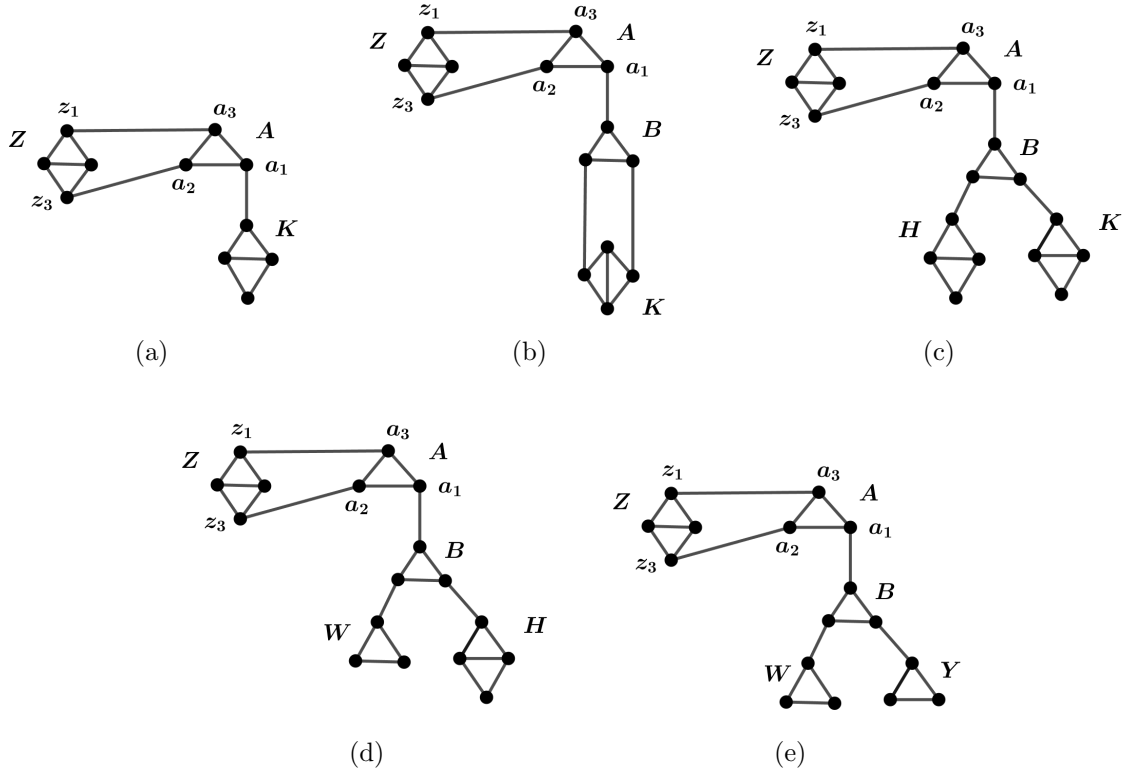


Figure 7: Possible situations for Case 2.v.
 (a) Case 2.v.a. (b) Case 2.v.b. (c) Case 2.v.c. (d) Case 2.v.d. (e) Case 2.v.e.

If n is even, then $V(\mathcal{G}_1)$ can be partitioned into 4-sets, each inducing a C_4 . So, by Proposition 1.10, Dominator wins.

Let n be odd. Then, Dominator uses the pairing strategy where the pairs are (u_i, v_{i-1}) for $i \in \{2, \dots, n\}$ and (u_1, v_n) . We need to prove that this is his winning strategy. Suppose that at some point of the game we have a situation that Staller's set contains vertices u_i, u_{i+2}, v_{i+1} . This means that vertex u_{i+1} stays uncovered by Dominator. This is not possible, because when Staller claimed vertex u_{i+2} (or v_{i+1}), Dominator, according to his strategy, must claim vertex v_{i+1} (or u_{i+2}) and in this way he covers vertex u_{i+1} . A contradiction. \square

The proof of Theorem 1.5. Consider Generalized Petersen graph $\mathcal{G}_2 = GP(n, 2)$.

Let $n = 6$. Suppose that in his first move Dominator claims some vertex l which belongs to internal polygon (see Figure 8(a)). Staller responds with $s_1 = u$. We consider the following cases:

Case 1. $d_2 \in \{z, t, v, w, y\}$.

Then, $s_2 = t_2$ which forces $d_3 = t_1$. By playing $s_3 = r_1$ Staller creates a double trap $r - r_2$. In her next move Staller isolates either r_2 or r .

Case 2. $d_2 \in \{t_1, t_2\}$.

Then, $s_2 = z$ which forces $d_3 = w$. By playing $s_3 = r_2$ Staller creates a double trap $r - r_1$. By claiming r or r_1 in her next move, Staller will isolate either r_1 or r .

Case 3. $d_2 \in \{r, r_1, r_2\}$.

Then, $s_2 = z$ which forces $d_3 = w$. By playing $s_3 = t_2$ Staller creates a double trap $y - t_1$. In her next move Staller isolates either l or t .

Next, suppose that Dominator plays his first move on the external polygon. Let $d_1 = y$. Then, Staller responds with $s_1 = u$. If $d_2 \in \{z, t, v, w, l\}$ or $d_2 \in \{t_1, t_2\}$, then Staller can use the same strategy as in Case 1 or Case 2, respectively.

Otherwise, if $d_2 \in \{r, r_1, r_2\}$, then Staller plays in the following way: $s_2 = t_1$ which forces $d_3 = t_2$. Next, by playing $s_3 = w$, Staller creates $l - z$ trap. By claiming z or l in her next move Staller will isolate v or y .

Let $n = 7$. Due to symmetries of the graph, the vertex l can be the first Dominator's move (see Figure 8(b)). Staller responds with $s_1 = u$. We consider the following cases:

Case 1. $d_2 \in \{t, r, w, z, y_2\}$.

Then, $s_2 = t_1$ which forces $d_3 = t_2$ and $s_3 = r_1$ which forces $d_4 = r_2$. Next, $s_4 = v$ and Staller creates a double trap $y_3 - y_1$. In her next move Staller isolates either w or z .

Case 2. $d_2 \in \{v, t_1, t_2, y_3\}$.

Then, $s_2 = w$ which forces $d_3 = z$. By playing $s_3 = r_2$ Staller creates a double trap $r_1 - y_1$. In her next move Staller isolates either r or y_3 .

Case 3. $d_2 \in \{r_1, r_2, y_1\}$.

Then, $s_2 = w$ which forces $d_3 = z$, $s_3 = t$ which forces $d_4 = y_2$ and $s_4 = r$ which forces $d_5 = v$. Next, $s_5 = t_2$ and Staller creates a double trap $y_3 - t_1$. In her next move Staller isolates either r_2 or t .

Let $n = 8$ and suppose that in his first move Dominator claims a vertex l which belongs to internal polygon (see Figure 8(c)). Staller responds with $s_1 = u$. We consider the following cases:

Case 1. $d_2 \in \{v, t_1, t_2, y_5\}$.

Then, $s_2 = r_2$ which forces $d_3 = r_1$ and $s_3 = t$ which forces $d_4 = y_3$. Next, by playing $s_4 = w$ Staller creates a double trap $y_4 - z$. By claiming z or y_4 in her fifth move, Staller isolates either v or t_1 .

Case 2. $d_2 \in \{w, t, y_3, y_4, z\}$.

Then, $s_2 = t_1$ which forces $d_3 = t_2$ and $s_3 = r_1$ which forces $d_4 = r_2$. Next, by playing $s_4 = v$ Staller creates a double trap $y_1 - y_5$. By claiming y_5 or y_1 in her fifth move, Staller isolates either w or z .

Case 3. $d_2 \in \{r_1, r_2\}$.

Then, $s_2 = t_2$ which forces $d_3 = t_1$, $s_3 = r$ which forces $d_4 = y_2$ and $s_4 = t$ which forces $d_5 = v$. Next, by playing $s_5 = w$ Staller creates a double trap $y_4 - z$. By claiming z or y_4 in her sixth move, Staller isolates v or t_1 .

Case 4. $d_2 \in \{r, y_1, y_2\}$.

Then, $s_2 = r_2$ which forces $d_3 = r_1$ and $s_3 = t$ which forces $d_4 = y_3$. Next, by playing $s_4 = w$, Staller creates a double trap $y_4 - z$. By claiming z or y_4 in her fifth move, Staller isolates v or t_1 .

Next, suppose that Dominator plays his first move on the external polygon. Let $d_1 = y_2$. Then, Staller responds with $s_1 = u$. If $d_2 \in \{v, t_1, t_2, y_5\}$ or if $d_2 \in \{w, t, y_3, y_4, z\}$, then Staller can use the same strategy as in Case 1 or Case 2, respectively. If $d_2 \in \{r_1, r_2\}$, then Staller plays in the following way: $s_2 = w$ which forces $d_3 = z$, $s_3 = y_4$ which forces $d_4 = t$. Next, by playing $s_4 = t_2$ Staller creates $l - t_1$ trap. By playing l or t_1 in her next move Staller will isolate either y_3 or t . Finally, if $d_2 \in \{r, y_1, l\}$, then Staller can use the same strategy as in Case 4.

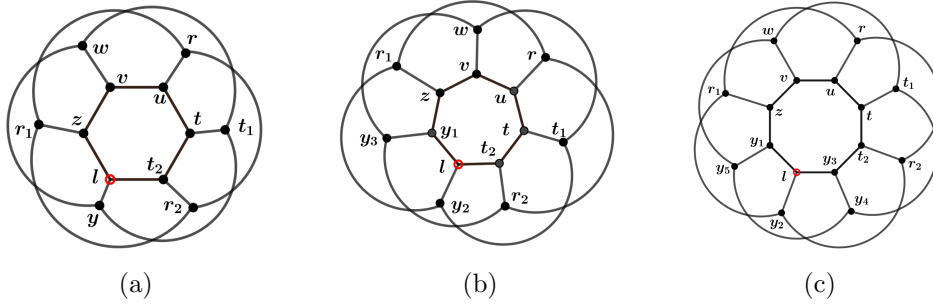


Figure 8: (a) Generalized Petersen graph $GP(6, 2)$ (b) Generalized Petersen graph $GP(7, 2)$ (c) Generalized Petersen graph $GP(8, 2)$

Consider Generalized Petersen graph $\mathcal{G}_2 = GP(n, 2)$ where $n \geq 9$.

After Dominator's first move, Staller can find subgraph $\tau \subseteq \mathcal{G}_2$ such that $d_1 \notin V(\tau)$. Suppose that in his first move Dominator claims some vertex l which belongs to internal polygon (see Figure 9(a)). Consider subgraph $\tau \subseteq \mathcal{G}_2$ with the vertex set $\{u, v, w, z, t, t_1, t_2, r_1, r_2, y_1, y_2, y_3, y_4, y_5, y_6\}$ where the vertices u and v are at distance 4 from the vertex l on the internal polygon. The subgraph τ is illustrated in Figure 9(b). In her first move Staller claims $s_1 = u$. It is enough to consider the cases when $d_2 \in \{v, w, t, t_1, t_2, y_4, y_5, y_6\}$.

Case 1. $d_2 \in \{w, t, y_4, y_5\}$.

Then, $s_2 = t_1$ which forces $d_3 = t_2$ and $s_3 = r_1$ which forces $d_4 = r_2$. Next, by playing $s_4 = v$ Staller creates a double trap $y_1 - y_6$. In her next move Staller isolates either w or z by claiming y_6 or y_1 .

Case 2. $d_2 = \{v, t_1, t_2, y_6\}$.

Then, $s_2 = r_2$ which forces $d_3 = r_1$ and $s_3 = t$ which forces $d_4 = y_4$. Next, by playing $s_4 = w$ Staller creates a double trap $y_5 - z$. In her next move Staller isolates either t_1 or v by claiming y_5 or z .

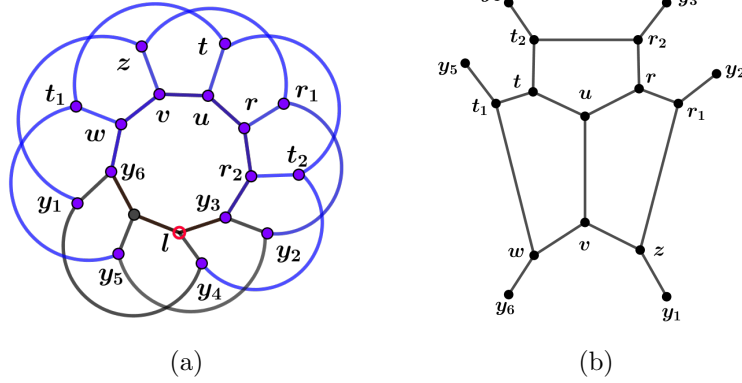


Figure 9: (a) Generalized Petersen graph $GP(9, 2)$ (b) subgraph τ

□

In the following we prove Theorem 1.6.

The proof of Theorem 1.6. Consider the cubic bipartite graph on n vertices with the vertex set $\{u_1, \dots, u_{n/2}, v_1, \dots, v_{n/2}\}$. Let $U = \{u_1, \dots, u_{n/2}\}$ and $V = \{v_1, \dots, v_{n/2}\}$ be a bipartition of the graph. Add an edge from each u_i to v_i, v_{i+i} and v_{i+2} (with indices modulo $n/2$).

W.l.o.g. suppose that $s_1 = u_i \in U$, for some $i \in \{1, 2, \dots, n/2\}$. Then $d_1 = u_{i-1} \in U$, modulo $n/2$. Note that every two vertices u_{i-1} and u_i from U have two common neighbours in V , v_i and v_{i+1} (and every two $v_{i-1}, v_i \in V$ have two common neighbours in U , u_{i-1}, u_{i-2}). In every other round $r \geq 2$, Dominator plays in the following way. If Staller claims a vertex which is a common neighbour of two vertices, say u_{k-1} and u_k such that for example, $u_{k-1} \in \mathfrak{D}$ and $u_k \in \mathfrak{S}$, then Dominator responds by claiming the other common neighbour of these two vertices. Otherwise, if Staller claimed some vertex u_l (or v_l) which is not common neighbour of any two vertices, $x, y \in U$ or V , such that, for example, $x \in \mathfrak{D}$ and $y \in \mathfrak{S}$ (or vice versa), then Dominator claims a free vertex u_{l-1} or u_{l+1} , with preference u_{l-1} (or, v_{l-1} or v_{l+1} with preference v_{l-1}) modulo $n/2$. If Dominator can not find such a free vertex, he claims an arbitrary free vertex from the graph with the preference that a vertex is a neighbour of vertex which is claimed by him earlier in the game.

We prove that this is a winning strategy for Dominator. Suppose that $v_i, v_{i+1}, v_{i+2} \in \mathfrak{S}$ for some $i \in \{1, 2, \dots, n/2\}$ modulo $n/2$, that is, Staller isolated vertex u_i . This means that when Staller claimed v_i , Dominator responded with v_{i-1} , but then when Staller

claimed v_{i+1} (or v_{i+2}), according to his strategy Dominator had to take v_{i+2} (or v_{i+1}). A contradiction. \square

Finally, we consider MBTD game on the connected cubic graph which is disjoint union of claws and prove Theorem 1.7.

The proof of Theorem 1.7. The graph G is a connected cubic graph on $4k$ vertices formed with $k \geq 2$ disjoint claws \mathcal{C}_i , $i \in \{1, \dots, k\}$. Let $V(\mathcal{C}_i) = \{x_i, y_i, z_i, t_i\}$, where t_i is a center of \mathcal{C}_i , for every $i \in \{1, \dots, k\}$.

First, suppose that $k = 2$. Let $E(G) = E(G[\mathcal{C}_1]) \cup E(G[\mathcal{C}_2]) \cup \{x_1x_2, y_1y_2, z_1z_2, x_1y_2, y_1z_2, z_1x_2\}$.

The graph can be partitioned into two 4-sets, $\{x_1, t_1, y_1, y_2\}$ and $\{z_1, z_2, t_2, x_2\}$ each inducing a C_4 (see Figure 10(a)). By Proposition 1.10 and Proposition 1.9, Dominator wins.

Let $k = 3$. Let $E(G) = E(G[\mathcal{C}_1]) \cup E(G[\mathcal{C}_2]) \cup E(G[\mathcal{C}_3]) \cup \{x_{i-1}x_i, y_{i-1}y_i, z_{i-1}z_i | i \in \{2, 3\}\} \cup \{x_1x_3, y_1y_3, z_1z_3\}$.

It is enough to consider the case when $d_1 \in V(\mathcal{C}_1)$. The cases when $d_1 \in V(\mathcal{C}_2)$ or $d_1 \in V(\mathcal{C}_3)$ are symmetric.

Case 1. $d_1 = x_1$.

Then, $s_1 = t_1$. After Dominator's second move either all vertices from \mathcal{C}_2 are free or all vertices from \mathcal{C}_3 are free. Suppose that all vertices from \mathcal{C}_3 are free. Also, at least two of the vertices x_2, y_2, z_2 must be free. Suppose that x_2 and z_2 are free. Then, $s_2 = z_3$ which forces $d_3 = z_2$. By $s_3 = x_3$ Staller creates a double trap $x_2 - y_3$. In her next move Staller isolates either x_1 or t_3 .

If $d_1 \in \{y_1, z_1\}$, the proof is very similar.

Case 2. $d_1 = t_1$.

Then, $s_1 = t_2$.

Case 2.1. $d_2 = t_3$. Then, $s_2 = z_3$ which forces $d_3 = z_1$. By playing $s_3 = x_3$, Staller creates a double trap $x_1 - y_3$. In her fourth move Staller isolates either x_2 or t_3 .

Case 2.2. $d_2 \in \{x_i, y_i, z_i\}$, $i \in \{1, 2, 3\}$.

Let $d_2 = x_i$. If $i = 1$, then Staller will make her next move on \mathcal{C}_3 and she will force Dominator to play his next move on \mathcal{C}_1 , if $i = 3$, Staller will make her next move on \mathcal{C}_1 and force Dominator to play on \mathcal{C}_3 . If $i = 2$, then she can make her next move either on \mathcal{C}_1 or \mathcal{C}_3 .

Suppose that $d_2 = x_1$. Then, $s_2 = z_3$ which forces $d_3 = z_1$. By playing $s_3 = y_3$ Staller creates a double trap $y_1 - x_3$. In her fourth move Staller isolates either y_2 or t_3 .

The proof is very similar if $d_2 = y_i$ or $d_2 = z_i$, $i \in \{1, 2, 3\}$.

Let $k \geq 4$. After Dominator's first move, Staller can find three consecutive claws \mathcal{C}_{i-1} , \mathcal{C}_i , \mathcal{C}_{i+1} such that all vertices from these three claws are free. Suppose that these three claws

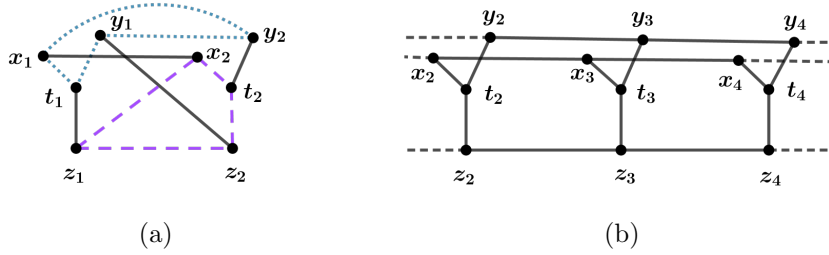


Figure 10: (a) Two claws (b) Three consecutive claws

are $\mathcal{C}_2, \mathcal{C}_3$ and \mathcal{C}_4 . Staller will play on a subgraph with the vertex set $V(\mathcal{C}_2), V(\mathcal{C}_3) \cup V(\mathcal{C}_4)$, and the edge set $E(G[\mathcal{C}_2]) \cup E(G[\mathcal{C}_3]) \cup E(G[\mathcal{C}_4]) \cup \{x_{i-1}x_i, y_{i-1}y_i, z_{i-1}z_i | i \in \{3, 4\}\}$ (Figure 10(b)). In her first move Staller plays $s_1 = t_3$.

If $d_2 \in V(\mathcal{C}_2)$, then Staller will make her next move on \mathcal{C}_4 and she will force Dominator to play his next move on \mathcal{C}_2 , if $d_2 \in V(\mathcal{C}_4)$, Staller will make her next move on \mathcal{C}_2 and force Dominator to play on \mathcal{C}_4 . If $d_2 \in V(\mathcal{C}_3)$, then she can make her moves either on \mathcal{C}_2 or \mathcal{C}_4 . Suppose that $d_2 \in V(\mathcal{C}_2) \cup V(\mathcal{C}_3)$.

Let $d_2 = x_2$ or $d_2 = t_2$. Then, $s_2 = z_4$ which forces $d_3 = z_2$. By playing $s_3 = y_4$ Staller creates a double trap $y_2 - x_4$. In her next move she isolates either y_3 or t_4 .

The cases when $d_2 \in \{y_2, z_2\}$ are symmetric. If $d_2 \in \{x_3, y_3, z_3\}$, Staller can apply the same strategy. \square

Remark 2.9. Note that if in the D -game on the connected cubic graph G on $n \geq 6$ vertices after Dominator's first move Staller can find at least one of the subgraphs G_1, G_4, τ , or subgraph which consists of three consecutive connected claws as in Figure 10(b), such that all vertices from that subgraph are free, then the graph G is \mathcal{S} .

3 Concluding remarks

In this paper we considered several types of connected cubic graphs in MBTD game and determined which are \mathcal{D} and which are \mathcal{S} . In order to determine the outcome of the game, we have focused on finding a representative subgraph of the given graph. As we can see from this paper, finding a suitable subgraph makes it easier to determine the winner of the game and helps in characterization of cubic connected graphs. However, we have not covered all connected cubic graphs, so there are still open problems related to this topic. Therefore, it would be interesting to find some other subgraphs that could contribute to expanding the class of cubic connected graphs for which the winner is known in MBTD game.

Biased games. We are curious to know what will happen in the *biased* setup of MBTD game. Given two positive integers, a and b , representing the *biases* of Staller and Dominator, respectively, in the biased $(a : b)$ MBTD game, Staller claims exactly a and Dominator claims exactly b elements of the board in each move. Now, if the biases of the

players are the same, i.e. *fair* ($a : a$) *game*, for $a \geq 2$, we wonder whether the outcome of the games change compared to the outcome of the (1 : 1) MBTD games that were previously studied.

Finally, we wonder how the situation changes if biased non-fair ($a : b$) MBTD games are played, i.e. the games in which $a \neq b$.

Acknowledgements

The research of the second author is partly supported by Provincial Government for Higher Education and Scientific Research, Republic of Serbia, Grant No. 142-451-3227/2020 and by Ministry of Education, Science and Technological Development, Republic of Serbia, Grant No. 174019.

References

- [1] J. Balogh, A. Pluhár, *The Positive Minimum Degree Game on Sparse Graphs*, Electron. J. Combin. 19(1) (2012), #P22.
- [2] J. Beck, **Combinatorial Games: Tic-Tac-Toe Theory**, Encyclopedia of Mathematics and Its Applications 114, Cambridge University Press, (2008).
- [3] B. Brešar, S. Klavžar and D. F. Rall, *Domination game and an imagination strategy*, SIAM J. Discrete Math., 24 (2010) pp. 979–991.
- [4] B. Brešar, S. Klavžar, D. F. Rall, *Domination game played on trees and spanning subgraphs*, Discrete Math. 313 (2013) pp. 915–923.
- [5] V. Chvátal and P. Erdős, *Biased Positional Games*, Annals of Discrete Mathematics, 2 (1978) pp. 221–229.
- [6] C. Bujtás, V. Iršič and S. Klavžar, *1/2-conjectures on the domination game and claw-free graphs*, arXiv preprint arXiv:2010.14273 (2020), <https://arxiv.org/pdf/2010.14273.pdf>.
- [7] D. Clemens, T. Tran, *Creating cycles in Walker-Breaker games*, Discrete Mathematics 339 (2016), pp. 2113–2126
- [8] E. J. Cockayne, R. M. Dawes, S. T. Hedetniemi, *Total domination in graphs*, Networks 10 (1980) pp. 211–219.
- [9] W. J. Desormeaux, T. W. Haynes, M. A. Henning, *Partitioning the vertices of a cubic graph into two total dominating sets*, Discrete Appl. Math. 223 (2017) pp. 52–63

- [10] P. Dorbec, G. Košmrlj, G. Renault, *The domination game played on unions of graphs*, Discrete Math. 338 (2015) pp. 71–79.
- [11] E. Duchêne, V. Gledel, A. Parreau and G. Renault, *Maker–Breaker domination game*, Discrete Mathematics, 343 (9) (2020), # 111955.
- [12] P. Erdős and J. L. Selfridge, *On a combinatorial game*, J. Combinatorial Theory Ser. A 14 (1973) pp. 298–301.
- [13] L. Espig, A. Frieze, W. Pegden, M. Krivelevich, *Walker–Breaker games*, SIAM Journal on Discrete Mathematics 29 (2015) pp. 1476–1485.
- [14] J. Forcan, M. Mikalački, *On the WalkerMaker–WalkerBreaker games*, Discrete Applied Mathematics 279 (2020) pp. 69–79.
- [15] V. Gledel, M.A. Henning, V. Iršič and S. Klavžar, *Maker–Breaker total domination game*, Discrete Applied Mathematics, 282 (2020) pp. 96–107.
- [16] V. Gledel, V. Iršič and S. Klavžar, *Maker–Breaker domination number*, Bulletin of the Malaysian Mathematical Sciences Society, 42(4) (2019) pp. 1773–1789.
- [17] H. Gebauer, T. Szabó, *Asymptotic Random Graph Intuition for the Biased Connectivity Game*, Random Structures and Algorithms 35 (2009) pp. 431–443.
- [18] D. Hefetz, M. Krivelevich, M. Stojaković, T. Szabó, *Planarity, colorability and minor games*, SIAM Journal on Discrete Mathematics 22 (2008) pp. 194–212.
- [19] D. Hefetz, M. Krivelevich, M. Stojaković, T. Szabó, *Global Maker–Breaker games on sparse graphs*, European Journal of Combinatorics, 32 (2) (2011) pp. 162–177.
- [20] D. Hefetz, M. Krivelevich, M. Stojaković and T. Szabó, **Positional Games**, Oberwolfach Seminars 44, Birkhäuser/Springer Basel, 2014.
- [21] R. R. Korfhage, **Discrete Computational Structures**, Academic Press, New York, second edition (1984).
- [22] M. Krivelevich, *The critical bias for the Hamiltonicity game is $(1+o(1))n/\ln n$* , Journal of the American Mathematical Society 24 (2011) pp. 125 – 131.
- [23] M. Kutz, *The Angel Problem, Positional Games, and Digraph Roots.*, PhD thesis, Freie Universität Berlin, 2004. <http://www.diss.fu-berlin.de/2004/250/indexe.html>.
- [24] M. Stojaković, T. Szabó, *Positional games on random graphs*, Random Structures and Algorithms 26 (2005) pp. 204–223.
- [25] B. Zelinka, *Some remarks on domination in cubic graphs*, Discrete Mathematics 158, no. 1-3 (1996) pp. 249–255.

- [26] M. E. Watkins, *A theorem on Tait colorings with an application to the generalized Petersen graphs*, *Journal of Combinatorial Theory*, 6(4) (1969) pp. 152–164.